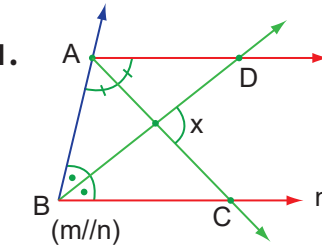
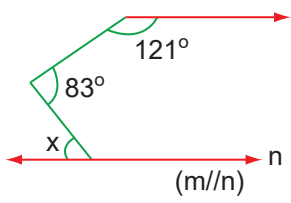
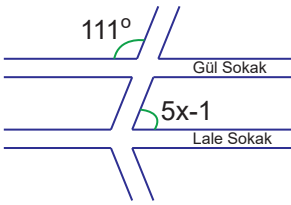
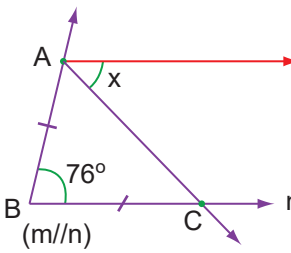
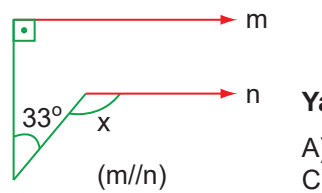


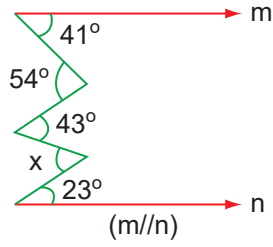
1.  Yandaki şekilde [AC] ve [BD] birer açıortaydır.
Buna göre x kaçtır?
A) 88 B) 90
C) 92 D) 94

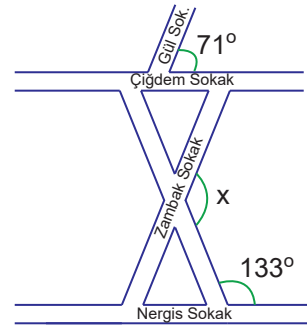
2.  Yandaki şekle göre x kaçtır?
A) 26 B) 25
C) 24 D) 23

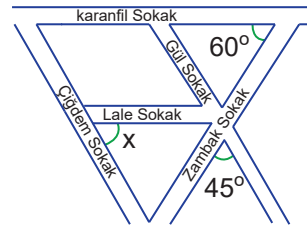
3.  Yandaki sokak krokisine göre gül ve lale sokaklar paraleldir.
Buna göre x kaçtır?
A) 14 B) 16
C) 18 D) 20

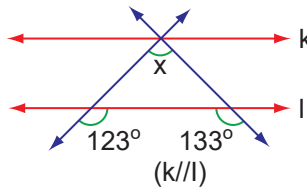
4.  Yandaki şekilde $|AB|=|BC|$ dir.
Buna göre x kaçtır?
A) 64 B) 62
C) 56 D) 52

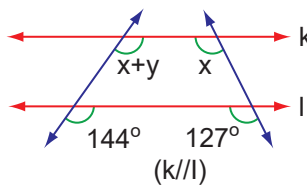
5.  Yandaki şekle göre x kaçtır?
A) 120 B) 123
C) 125 D) 130

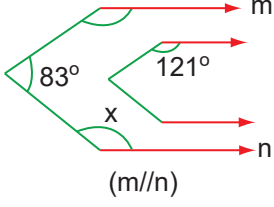
6.  Yandaki şekle göre x kaçtır?
A) 57 B) 55
C) 53 D) 51

7.  Yandaki sokak krokisine göre gül sokak ile zambak sokak, çiğdem sokak ile zambak sokak paraleldir.
Buna göre x kaçtır?
A) 118 B) 122
C) 126 D) 129

8.  Yandaki sokak krokisine göre lale sokak ile karanfil sokak, çiğdem sokak ile gül sokak paraleldir.
Buna göre x kaçtır?
A) 60 B) 65
C) 70 D) 75

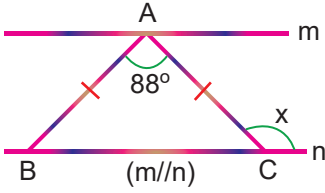
9.  Yandaki şekle göre x kaçtır?
A) 76 B) 75
C) 74 D) 73

10.  Yandaki şekle göre y kaçtır?
A) 19 B) 17
C) 15 D) 13

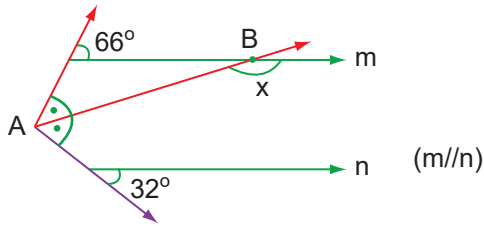
11.  Yandaki şekil büyük şekil ve bu şeklin belirli bir oranında küçültülmüş halinden oluşmaktadır. Şekillerin karşılıklı kenarları birbirine paraleldir.

Buna göre x kaçtır?

- A) 152 B) 154
C) 156 D) 162

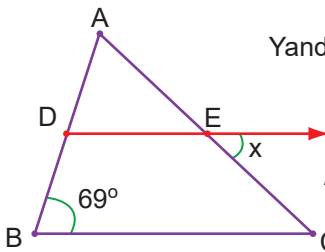
12.  Yandaki şekilde $|AB|=|BC|$ dir. Buna göre x kaç derecedir?

- A) 104 B) 114
C) 124 D) 134

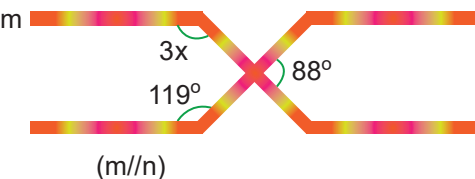
13.  Yukarıdaki şekilde [AB] bir açkırtaydır.

Buna göre x kaçtır?

- A) 163 B) 168
C) 170 D) 171

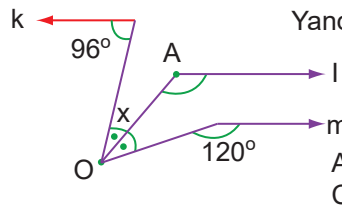
14.  Yandaki şekilde $|CA|=|CB|$ ve $[DE]//[BC]$ dir. Buna göre x kaçtır?

- A) 40 B) 41
C) 42 D) 45

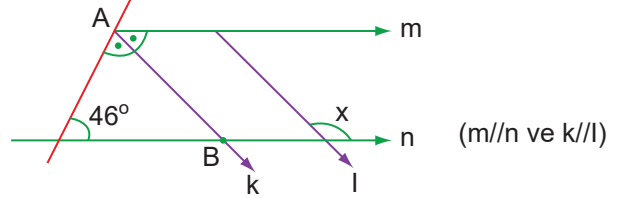
15.  Yandaki şekle göre x kaç derecedir?

Buna göre x kaç derecedir?

- A) 50 B) 51
C) 52 D) 55

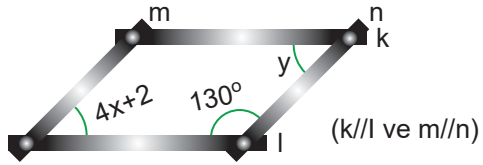
16.  Yandaki şekilde [OA] bir açırtaydır. Buna göre x kaçtır? ($k//l//m$)

- A) 32 B) 26
C) 22 D) 18

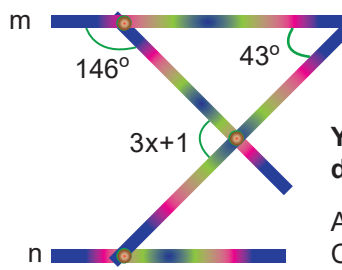
17.  Yukarıdaki şekilde [AB] bir açırtaydır.

Buna göre x kaçtır?

- A) 134 B) 124
C) 120 D) 113

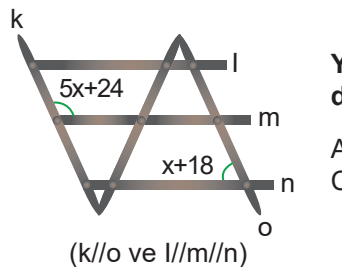
18.  Yukarıdaki şekle göre x+y kaç derecedir?

- A) 50 B) 60
C) 62 D) 72

19.  Yandaki şekle göre x kaç derecedir? ($m//n$)

Buna göre x kaç derecedir?

- A) 25 B) 30
C) 33 D) 38

20.  Yandaki şekle göre x kaç derecedir? ($k//o$ ve $l//m//n$)

Buna göre x kaç derecedir?

- A) 21 B) 22
C) 23 D) 24

